

Please check the examination details below before entering your candidate information

Candidate surname

Other names

**Pearson Edexcel
Level 3 GCE**

Centre Number

--	--	--	--	--

Candidate Number

--	--	--	--	--

Friday 24 May 2019

Morning (Time: 1 hour 45 minutes)

Paper Reference **9PH0/02**

Physics

Advanced

Paper 2: Advanced Physics II

You must have:

Ruler

Total Marks

Instructions

- Use **black** ink or ball-point pen.
- **Fill in the boxes** at the top of this page with your name, centre number and candidate number.
- Answer **all** questions.
- Answer the questions in the spaces provided – *there may be more space than you need.*

Information

- The total mark for this paper is 90.
- The marks for **each** question are shown in brackets – *use this as a guide as to how much time to spend on each question.*
- You may use a scientific calculator.
- In questions marked with an **asterisk** (*), marks will be awarded for your ability to structure your answer **logically**, showing how the points that you make are related or follow on from each other where appropriate.

Advice

- Read each question carefully before you start to answer it.
- Try to answer every question.
- Check your answers if you have time at the end.
- You are advised to show your working in calculations, including units where appropriate.

Turn over ►

P58360A

©2019 Pearson Education Ltd.

1/1/1/1/

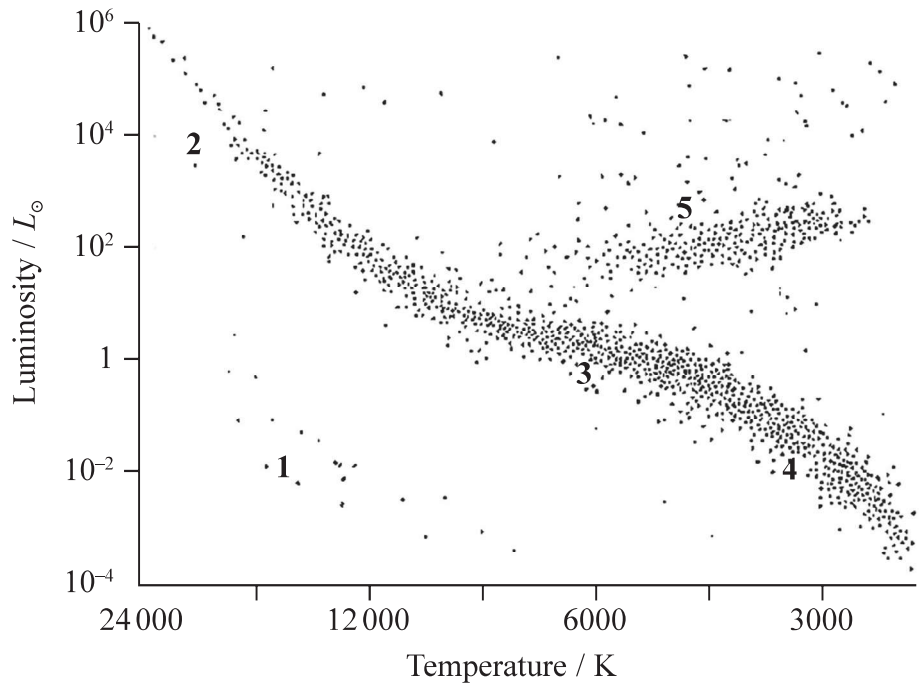



Pearson

Answer ALL questions.

All multiple choice questions must be answered with a cross in the box for the correct answer from A to D. If you change your mind about an answer, put a line through the box and then mark your new answer with a cross .

1 Five regions are labelled on the Hertzsprung-Russell diagram shown.



Which sequence could show part of the evolution of a star like the Sun?

- A 1→5→3
- B 2→3→4
- C 3→5→1
- D 4→3→2

(Total for Question 1 = 1 mark)

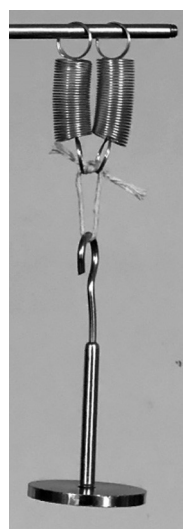


2 A mass is supported by a single spring as shown.



The strain energy stored by the spring is E .

The mass is then supported by two springs, each identical to the first spring, as shown.



What is the total strain energy stored with two springs arranged in this way?

- A $\frac{1}{4} E$
- B $\frac{1}{2} E$
- C E
- D $2E$

(Total for Question 2 = 1 mark)



- 3 In both nuclear fission and nuclear fusion there are changes in the binding energy per nucleon. This releases energy.

Which row of the table correctly shows the change in binding energy per nucleon for both processes?

	Nuclear fission	Nuclear fusion
<input type="checkbox"/> A	decrease	decrease
<input type="checkbox"/> B	decrease	increase
<input type="checkbox"/> C	increase	decrease
<input type="checkbox"/> D	increase	increase

(Total for Question 3 = 1 mark)

- 4 The radium isotope ${}^{226}_{88}\text{Ra}$ is unstable and undergoes a series of α and β^- emissions until a stable isotope of lead ${}^{206}_{82}\text{Pb}$ is formed.

Which of the following nuclear equations correctly shows the number of α and β^- emissions?

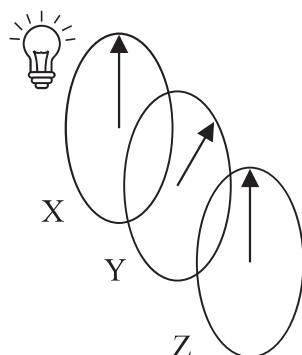
- A ${}^{226}_{88}\text{Ra} \rightarrow {}^{206}_{82}\text{Pb} + 3\alpha + 8\beta^-$
- B ${}^{226}_{88}\text{Ra} \rightarrow {}^{206}_{82}\text{Pb} + 4\alpha + 5\beta^-$
- C ${}^{226}_{88}\text{Ra} \rightarrow {}^{206}_{82}\text{Pb} + 5\alpha + 4\beta^-$
- D ${}^{226}_{88}\text{Ra} \rightarrow {}^{206}_{82}\text{Pb} + 5\alpha + 6\beta^-$

(Total for Question 4 = 1 mark)



- 5 Three polarising filters X, Y and Z, are placed in front of a source of unpolarised light. The planes of polarisation of the filters are initially parallel.

Filter Y is rotated by 45° as shown.



Filter Z is then rotated clockwise and the intensity of light emerging from Z is measured.

Which angle of rotation of Z will result in the lowest intensity of light?

- A 90°
- B 135°
- C 180°
- D 225°

(Total for Question 5 = 1 mark)

- 6 When light is incident on the surface of a metal, electrons may be emitted by the photoelectric effect. Observations of the photoelectric effect helped to establish that light can exhibit particle behaviour.

Which of the following observations of the photoelectric effect could also be explained by light behaving as a wave?

- A Emission of photoelectrons occurs immediately the surface is illuminated.
- B Photoelectrons are only emitted when the frequency of the light is more than a certain minimum value.
- C The maximum kinetic energy of the photoelectrons is independent of the intensity of the incident light.
- D When the intensity of the incident light increases, photoelectrons are emitted at a greater rate.

(Total for Question 6 = 1 mark)



7 A star of diameter D and surface temperature T has luminosity L .

What is the luminosity of a star of diameter $\frac{D}{2}$ and surface temperature $2T$?

- A $\frac{L}{4}$
- B L
- C $4L$
- D $16L$

(Total for Question 7 = 1 mark)

8 An object of volume V made from a material of density ρ_1 is placed into a fluid of density ρ_2 .

Which of the following gives the upthrust on the object?

- A $\rho_1 Vg$
- B $\rho_2 Vg$
- C $(\rho_2 - \rho_1) Vg$
- D $\frac{(\rho_2 + \rho_1)}{2} Vg$

(Total for Question 8 = 1 mark)

9 Electric and gravitational fields have a number of similarities and differences.

An electric field is produced by a point charge and a gravitational field is produced by a point mass.

Which of the following statements applies to both of these fields?

- A The field causes a force on all particles.
- B The force caused by the field can be attractive or repulsive.
- C At a distance x from the centre of the field, field strength is proportional to x^2 .
- D At a distance x from the centre of the field, potential is proportional to $1/x$.

(Total for Question 9 = 1 mark)



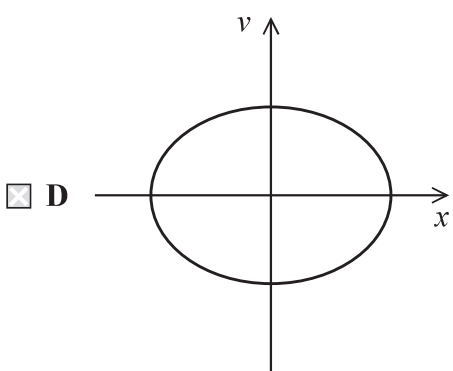
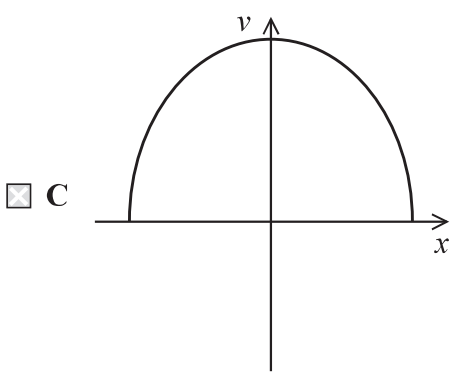
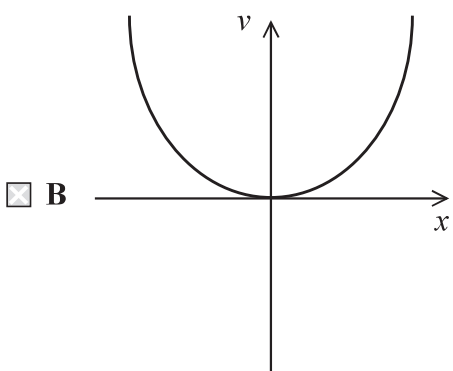
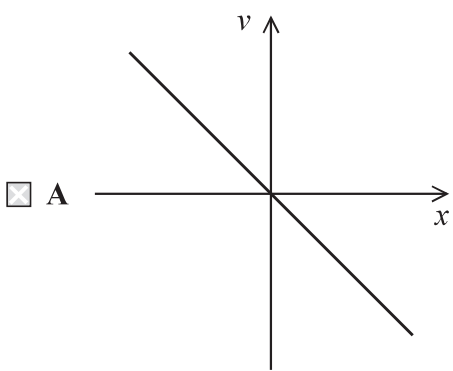
DO NOT WRITE IN THIS AREA

DO NOT WRITE IN THIS AREA

DO NOT WRITE IN THIS AREA

10 A mass at the end of a spring is set into small amplitude simple harmonic motion.

Which of the following graphs correctly shows the variation of velocity v of the mass with displacement x for one complete oscillation?



(Total for Question 10 = 1 mark)




DO NOT WRITE IN THIS AREA

DO NOT WRITE IN THIS AREA

DO NOT WRITE IN THIS AREA

12 The photograph shows a sample of the mineral selenite. Selenite is made up of many long, narrow crystals.



Selenite has a refractive index of 1.52

(a) Calculate the speed of light in selenite.

(2)

.....

.....

.....

.....

Speed of light in selenite =

(b) (i) State what is meant by critical angle.

(1)

.....

.....

.....



(ii) Calculate the critical angle for light in selenite.

(2)


.....

.....

.....

Critical angle for light in selenite =

(c) Selenite can act as a collection of optical fibres, so that an image of writing beneath the mineral sample appears as if it is at the upper surface as shown.



Explain how light travels through a selenite crystal.

(2)

.....

.....

.....

.....

.....

(Total for Question 12 = 7 marks)

DO NOT WRITE IN THIS AREA

DO NOT WRITE IN THIS AREA

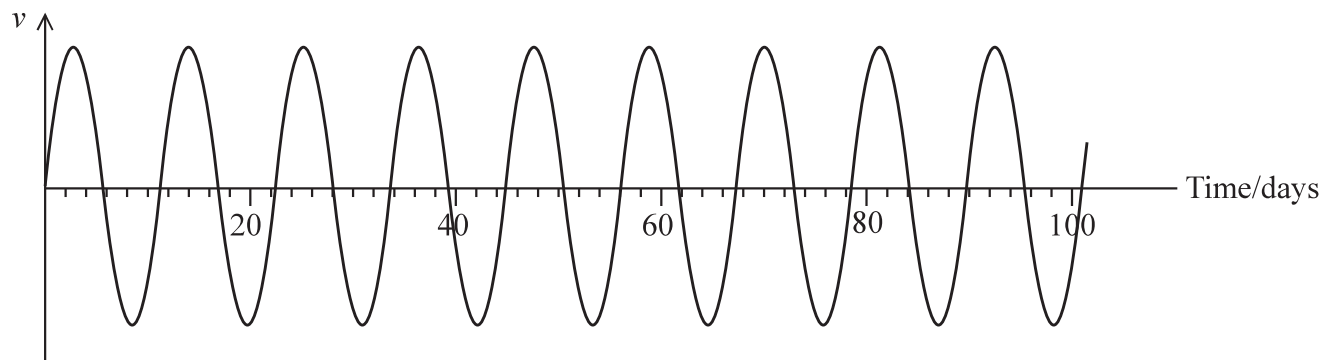
DO NOT WRITE IN THIS AREA



14 In 2016 astronomers announced the discovery of an Earth-like planet orbiting Proxima Centauri, the closest star to the Sun.

The planet was detected because of the small movement of the star as the planet orbited. The movement was detected using the Doppler shift in the frequency of light travelling to the Earth.

The graph shows how the component of the star's velocity v towards the Earth varied over time.



(a) Explain how the Doppler shift was used to obtain the data shown on the graph.

(4)

.....

.....

.....

.....

.....

.....

.....

.....

.....

.....

.....



DO NOT WRITE IN THIS AREA

DO NOT WRITE IN THIS AREA

DO NOT WRITE IN THIS AREA

(b) (i) Use the graph to show that the angular velocity of the planet is about 6×10^{-6} radian s^{-1} .

(3)

.....

.....

.....

.....

.....

.....

(ii) The mass of Proxima Centauri is 0.12 times the mass of the Sun.

Determine the distance of the planet from Proxima Centauri.

mass of Sun = 1.99×10^{30} kg

(3)

.....

.....

.....

.....

.....

.....

.....

Distance =

(Total for Question 14 = 10 marks)



15 The photograph shows an ultrasonic mouse repeller used in a house.



The mouse repeller produces ultrasound that repels mice but cannot be heard by humans. The mouse hears ultrasound directly and by reflection from the walls.

The mouse repeller produces ultrasound of frequency 26.0 kHz.

speed of sound = 340 m s^{-1}

(a) Calculate the wavelength of the ultrasound produced.

(2)

.....

.....

.....

.....

Wavelength =

(b) State what is meant by superposition of waves.

(2)

.....

.....

.....

.....



16 The photograph shows an example of a Foucault pendulum.



This is a pendulum that consists of a massive sphere, suspended by a long wire from a high ceiling. Over time the vertical plane through which the pendulum swings appears to rotate because of the rotation of the Earth.

mass of sphere = 28.0 kg

(a) The pendulum makes 8 complete oscillations in 52.2 s.

Show that the length of the wire supporting the sphere is about 10 m.

diameter of sphere = 60.0 cm

(4)

DO NOT WRITE IN THIS AREA

DO NOT WRITE IN THIS AREA

DO NOT WRITE IN THIS AREA



(b) During refurbishment, the pendulum is taken down and the wire is replaced.

Steel wires of the following diameters are available:

0.71 mm 0.91 mm 1.22 mm 1.63 mm 2.03 mm

- (i) Explain which of these wires is the thinnest that could be used to support the sphere safely.

breaking stress of steel = $3.10 \times 10^8 \text{ N m}^{-2}$

(3)

.....

.....

.....

.....

.....

.....



(ii) The wire identified in part (i) is used for the pendulum, the unstretched length of the new wire is 11.2 m.

Calculate the extension of the new wire when the sphere is attached.

Young Modulus for steel = 200 GPa

(3)

Extension =

(c) To show the rotation of the Earth, the pendulum needs to oscillate for several hours.

Explain how using a heavy sphere is better than using a light sphere of the same diameter.

(3)

(Total for Question 16 = 13 marks)

DO NOT WRITE IN THIS AREA

DO NOT WRITE IN THIS AREA

DO NOT WRITE IN THIS AREA




DO NOT WRITE IN THIS AREA

DO NOT WRITE IN THIS AREA

DO NOT WRITE IN THIS AREA

17 The photograph shows a school spectrometer.



The spectrometer allows parallel rays of light to be passed through a diffraction grating and the resulting angles of diffraction to be measured.

- (a) In the telescope, light from the grating is focused to make a real image 16.7 mm in front of the eyepiece lens. The eyepiece lens then uses this real image as an object to produce a magnified virtual image for the observer.

Calculate the magnification produced by the eyepiece lens.

focal length of eyepiece lens = 17.9 mm

(3)

.....

.....

.....

.....

.....

.....

.....

.....

Magnification =



(ii) Diffraction gratings with the following spacings are available:

$d/10^{-6}$ m	1.0	1.7	2.0	3.3
---------------	-----	-----	-----	-----

Explain which would be the best spacing to use to measure the diffraction angle for the third order maximum for yellow light of wavelength 589 nm.

(3)

.....

.....

.....

.....

.....

.....

DO NOT WRITE IN THIS AREA

DO NOT WRITE IN THIS AREA

DO NOT WRITE IN THIS AREA



18 An old type of camping lamp used a 'gas mantle'. The gas mantle is heated by the gas flame on the lamp and emits a bright white light. Gas mantles used to contain thorium-230.

Thorium-230 decays by alpha emission to form an isotope of radium. A student keeps a radioactive gas mantle in a sealed polythene bag. The student suggests that over a period of a year a significant volume of helium gas will be collected, since an alpha particle is a helium nucleus.

(a) Give reasons why the sealed plastic bag is suitable for collecting the gas.

(2)

(b) A particular gas mantle contains 5.18×10^{-5} g of thorium-230.

(i) Show that the activity of the thorium-230 in the mantle is about 4.0×10^4 Bq.

230 g of thorium-230 contains 6.02×10^{23} atoms

half-life of thorium-230 = 75 400 years

number of seconds in 1 year = 3.15×10^7

(4)



- (ii) Determine the volume of helium gas that could be collected in a year as a result of alpha emission.

Assume that the temperature is $22.0\text{ }^\circ\text{C}$ and the pressure is $1.00 \times 10^5\text{ Pa}$.

(4)

Volume =

- (iii) Calculate the root mean square speed of the atoms in the helium gas at a temperature of $22.0\text{ }^\circ\text{C}$.

(3)

Root mean square speed =

(Total for Question 18 = 13 marks)

TOTAL FOR PAPER = 90 MARKS

Every effort has been made to contact copyright holders to obtain their permission for the use of copyright material. Pearson Education Ltd. will, if notified, be happy to rectify any errors or omissions and include any such rectifications in future editions.

DO NOT WRITE IN THIS AREA

DO NOT WRITE IN THIS AREA

DO NOT WRITE IN THIS AREA



List of data, formulae and relationships

Acceleration of free fall	$g = 9.81 \text{ m s}^{-2}$	(close to Earth's surface)
Boltzmann constant	$k = 1.38 \times 10^{-23} \text{ J K}^{-1}$	
Coulomb law constant	$k = \frac{1}{4\pi\epsilon_0} = 8.99 \times 10^9 \text{ N m}^2 \text{ C}^{-2}$	
Electron charge	$e = -1.60 \times 10^{-19} \text{ C}$	
Electron mass	$m_e = 9.11 \times 10^{-31} \text{ kg}$	
Electronvolt	$1 \text{ eV} = 1.60 \times 10^{-19} \text{ J}$	
Gravitational constant	$G = 6.67 \times 10^{-11} \text{ N m}^2 \text{ kg}^{-2}$	
Gravitational field strength	$g = 9.81 \text{ N kg}^{-1}$	(close to Earth's surface)
Permittivity of free space	$\epsilon_0 = 8.85 \times 10^{-12} \text{ F m}^{-1}$	
Planck constant	$h = 6.63 \times 10^{-34} \text{ J s}$	
Proton mass	$m_p = 1.67 \times 10^{-27} \text{ kg}$	
Speed of light in a vacuum	$c = 3.00 \times 10^8 \text{ m s}^{-1}$	
Stefan-Boltzmann constant	$\sigma = 5.67 \times 10^{-8} \text{ W m}^{-2} \text{ K}^{-4}$	
Unified atomic mass unit	$u = 1.66 \times 10^{-27} \text{ kg}$	

Mechanics

Kinematic equations of motion

$$s = \frac{(u + v)t}{2}$$

$$v = u + at$$

$$s = ut + \frac{1}{2}at^2$$

$$v^2 = u^2 + 2as$$

Forces

$$\Sigma F = ma$$

$$g = \frac{F}{m}$$

$$W = mg$$

$$\text{moment of force} = Fx$$

Momentum

$$p = mv$$

Work, energy and power

$$\Delta W = F\Delta s$$

$$E_k = \frac{1}{2}mv^2$$

$$\Delta E_{\text{grav}} = mg\Delta h$$

$$P = \frac{E}{t}$$

$$P = \frac{W}{t}$$

$$\text{efficiency} = \frac{\text{useful energy output}}{\text{total energy input}}$$

$$\text{efficiency} = \frac{\text{useful power output}}{\text{total power input}}$$



Electric circuits

Potential difference

$$V = \frac{W}{Q}$$

Resistance

$$R = \frac{V}{I}$$

Electrical power and energy

$$P = VI$$

$$P = I^2R$$

$$P = \frac{V^2}{R}$$

$$W = VIt$$

Resistivity

$$R = \frac{\rho l}{A}$$

Current

$$I = \frac{\Delta Q}{\Delta t}$$

$$I = nqvA$$

Materials

Density

$$\rho = \frac{m}{V}$$

Stokes' law

$$F = 6\pi\eta r v$$

Hooke's law

$$\Delta F = k\Delta x$$

Young modulus

$$\text{Stress } \sigma = \frac{F}{A}$$

$$\text{Strain } \varepsilon = \frac{\Delta x}{x}$$

$$E = \frac{\sigma}{\varepsilon}$$

Elastic strain energy

$$\Delta E_{\text{el}} = \frac{1}{2}F\Delta x$$

Waves and Particle Nature of Light

Wave speed

$$v = f\lambda$$

Speed of a transverse wave on a string

$$v = \sqrt{\frac{T}{\mu}}$$

Intensity of radiation

$$I = \frac{P}{A}$$

Power of a lens

$$P = \frac{1}{f}$$

$$P = P_1 + P_2 + P_3 + \dots$$

Thin lens equation

$$\frac{1}{u} + \frac{1}{v} = \frac{1}{f}$$

Magnification for a lens

$$m = \frac{\text{image height}}{\text{object height}} = \frac{v}{u}$$

Diffraction grating

$$n\lambda = d \sin \theta$$



Refractive index

$$n_1 \sin \theta_1 = n_2 \sin \theta_2$$

$$n = \frac{c}{v}$$

Critical angle

$$\sin C = \frac{1}{n}$$

Photon model

$$E = hf$$

Einstein's photoelectric equation

$$hf = \phi + \frac{1}{2}mv_{\max}^2$$

de Broglie wavelength

$$\lambda = \frac{h}{p}$$

Further mechanics

Impulse

$$F\Delta t = \Delta p$$

Kinetic energy of a non-relativistic particle

$$E_k = \frac{p^2}{2m}$$

Motion in a circle

$$v = \omega r$$

$$T = \frac{2\pi}{\omega}$$

$$F = ma = \frac{mv^2}{r}$$

$$a = \frac{v^2}{r}$$

$$a = r\omega^2$$

Centripetal force

$$F = \frac{mv^2}{r}$$

$$F = mr\omega^2$$

Fields

Coulomb's law

$$F = k \frac{Q_1 Q_2}{r^2}$$

$$\text{where } k = \frac{1}{4\pi\epsilon_0}$$

Electric field strength

$$E = \frac{F}{Q}$$

$$E = k \frac{Q}{r^2}$$

$$E = \frac{V}{d}$$

Electric potential

$$V = k \frac{Q}{r}$$

Capacitance

$$C = \frac{Q}{V}$$

Energy stored in a capacitor

$$W = \frac{1}{2}QV$$

Capacitor discharge

$$Q = Q_0 e^{-t/RC}$$

Resistor – capacitor discharge

$$I = I_0 e^{-t/RC}$$

$$V = V_0 e^{-t/RC}$$

In a magnetic field

$$F = BIl \sin \theta$$

$$F = Bqv \sin \theta$$

Faraday's and Lenz's laws

$$\epsilon = \frac{-d(N\phi)}{dt}$$

Root-mean-square values

$$V_{\text{rms}} = \frac{V_0}{\sqrt{2}}$$

$$I_{\text{rms}} = \frac{I_0}{\sqrt{2}}$$



Nuclear and particle physics

In a magnetic field

$$r = \frac{p}{BQ}$$

Thermodynamics

Heating

$$\Delta E = mc\Delta\theta$$

$$\Delta E = L\Delta m$$

Molecular kinetic theory

$$\frac{1}{2}m\langle c^2 \rangle = \frac{3}{2}kT$$

$$pV = \frac{1}{3}Nm\langle c^2 \rangle$$

Ideal gas equation

$$pV = NkT$$

Stefan-Boltzmann law

$$L = \sigma AT^4$$

$$L = \sigma 4\pi r^2 T^4$$

Wien's law

$$\lambda_{\max} T = 2.898 \times 10^{-3} \text{ m K}$$

Space

Intensity

$$I = \frac{L}{4\pi d^2}$$

Redshift of electromagnetic radiation

$$z = \frac{\Delta\lambda}{\lambda} \approx \frac{\Delta f}{f} \approx \frac{v}{c}$$

Cosmological expansion

$$v = H_0 d$$

Nuclear radiation

Mass-energy

$$\Delta E = c^2 \Delta m$$

Radioactive decay

$$A = \lambda N$$

$$\frac{dN}{dt} = -\lambda N$$

$$\lambda = \frac{\ln 2}{t_{1/2}}$$

$$N = N_0 e^{-\lambda t}$$

$$A = A_0 e^{-\lambda t}$$

Gravitational fields

Gravitational force

$$F = \frac{Gm_1 m_2}{r^2}$$

Gravitational field strength

$$g = \frac{Gm}{r^2}$$

Gravitational potential

$$V_{\text{grav}} = \frac{-Gm}{r}$$

Oscillations

Simple harmonic motion

$$F = -kx$$

$$a = -\omega^2 x$$

$$x = A \cos \omega t$$

$$v = -A\omega \sin \omega t$$

$$a = -A\omega^2 \cos \omega t$$

$$T = \frac{1}{f} = \frac{2\pi}{\omega}$$

$$\omega = 2\pi f$$

Simple harmonic oscillator

$$T = 2\pi \sqrt{\frac{m}{k}}$$

$$T = 2\pi \sqrt{\frac{l}{g}}$$

